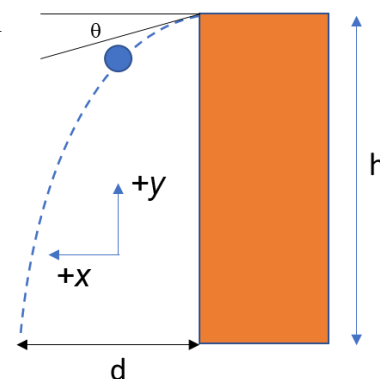


The next four questions pertain to the situation described below.

A ball with mass $m = 1.8$ kg is thrown downward from the top of a building with height $h = 16$ m and initial speed v_0 at an angle θ with respect to the horizontal as shown in the figure. The x -component of the initial velocity $v_{x0} = 23.4$ m/s, and the ball hits the ground a distance $d = 24$ m from the building as shown in the figure.



1) How long is the ball in the air?

- a. $t = 1.81$ s
- b. $t = 1.03$ s
- c. $t = 4.78$ s

2) What is v_{y0} , the y component of the ball's initial velocity?

- a. $v_{y0} = -19$ m/s
- b. $v_{y0} = -13$ m/s
- c. $v_{y0} = -26$ m/s
- d. $v_{y0} = -11$ m/s
- e. $v_{y0} = 0$ m/s

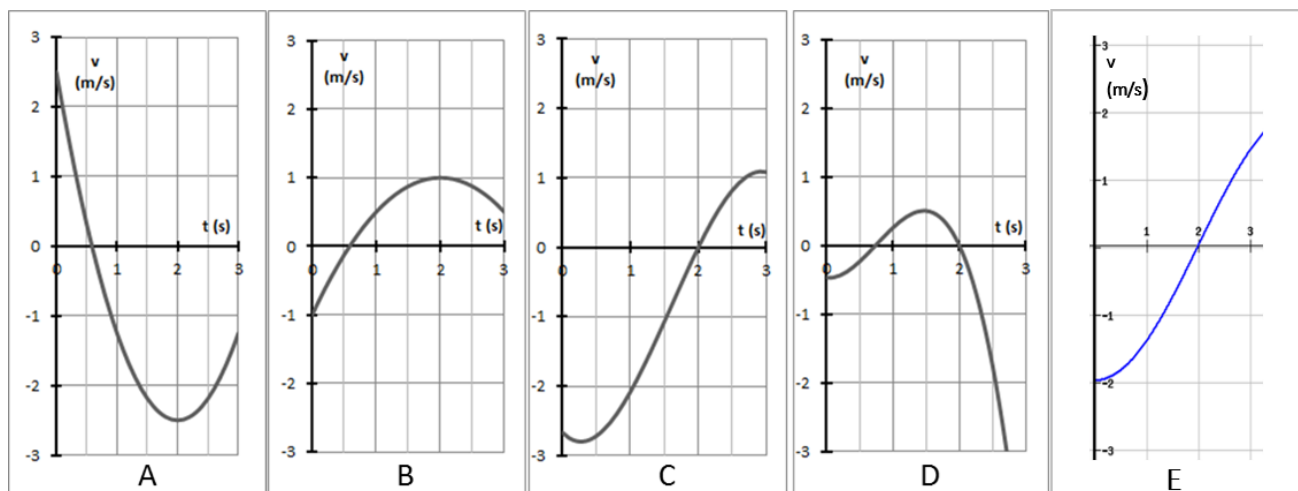
3) If the ball is thrown at the same angle, but with a greater speed, the ball would be in the air

- a. a **shorter** time.
- b. a **longer** time.
- c. the **same** amount of time.

4) If the ball is thrown with the same speed, but horizontally (e.g. $\theta=0$), it would hit the ground with

- a. a **faster** speed than when it was thrown downward.
- b. a **slower** speed than when it was thrown downward.
- c. the **same** speed as when it was thrown downward.

The next two questions pertain to the situation described below.



A ball's motion is represented by the velocity time-graph above.

5) Which of the velocity-time graphs best represents this statement?

An object has zero acceleration at $t=2$ s. At $t=2.5$ s, it is moving in the positive direction and slowing down.

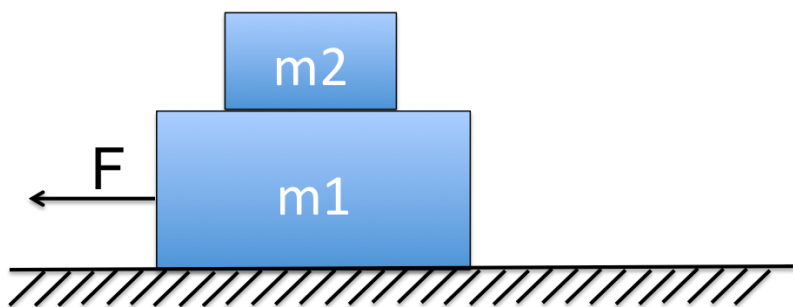
- a. A
- b. B
- c. C
- d. D
- e. E

6) Which of the velocity-time graphs best represents this statement?

The object is moving in the positive direction and speeding up at $t=1.75$ s. The object has has negative acceleration at $t=2.5$ s.

- a. A
- b. B
- c. C
- d. D
- e. E

The next three questions pertain to the situation described below.

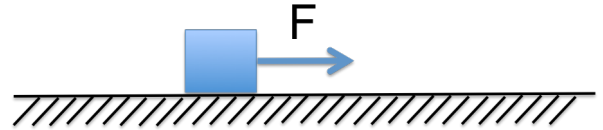
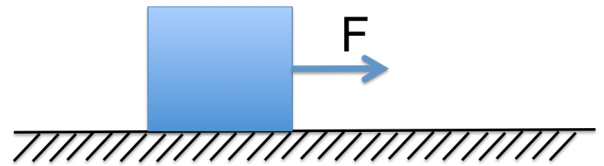


A box of mass $m_1 = 10$ kg is placed on a frictionless surface. A smaller box of mass $m_2 = 3$ kg is placed on top of the larger box. The system of boxes is initially at rest. A horizontal force F is applied to the lower box, pulling it to the left as shown in the figure. The coefficients of static and kinetic friction between the two boxes are $\mu_k = 0.25$ and $\mu_s = 0.29$.

- 7) Initially, the two boxes are observed to move together (the small box remains on top of the large box). What is the direction of the friction force applied **by** the smaller box m_2 on the larger box m_1 ?
- to the left
 - to the right
 - there is no frictional force between the two boxes
- 8) What is the maximum force F_{\max} that can be applied, before the small box begins to slide relative to the large box?
- $F_{\max} = 37$ N
 - $F_{\max} = 7.4$ N
 - $F_{\max} = 32$ N
 - $F_{\max} = 28$ N
 - $F_{\max} = 24$ N
- 9) If the boxes start from rest, and a force $F = 12$ N is applied until the boxes have moved a distance of 2.5 m, what is the work done by friction on the **top** box m_2 ? (You may assume the two boxes move together.)
- $W_{\text{friction}} = 6.9$ J
 - $W_{\text{friction}} = 0$ J
 - $W_{\text{friction}} = 21$ J
 - $W_{\text{friction}} = -6.9$ J
 - $W_{\text{friction}} = -21$ J

The next two questions pertain to the situation described below.

A solid cubic box of mass $m = 4$ kg is pushed along a floor by a horizontal force $F = 12$ N. The box is observed to move with a constant velocity $v = 0.3$ m/s.



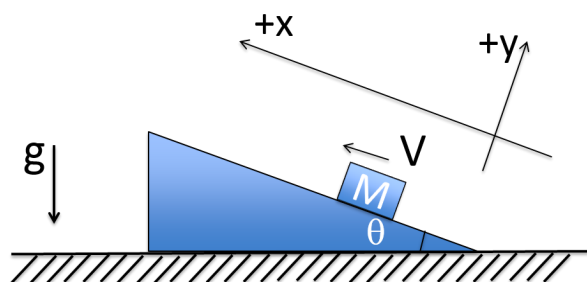
10) What is the coefficient of kinetic friction between the box and the floor?

- a. $\mu = 0.0092$
- b. $\mu = 0.15$
- c. $\mu = 0.31$

11) A second box is made of the same material as the first box but is half the size of the first box in every dimension. Subject to the same force $F = 12$ N, the second box:

- a. Moves with the same constant velocity as the first box.
- b. Moves with a constant acceleration
- c. Moves with a constant velocity eight times that of the first box.

The next three questions pertain to the situation described below.



A box of mass $M = 0.4$ kg is moving along a stationary ramp upward ($+x$ direction) as shown in the figure. The box's initial speed $V = 1.4$ m/s. The angle between the ramp and the horizontal plane $\theta = 24$ degrees, and the coefficient of friction between the box and the ramp is $\mu_k = 0.32$.

12) What is the magnitude of the box's acceleration as it is moving up the ramp?

- a. $|a_{\text{up}}| = 6.9$ m/s²
- b. $|a_{\text{up}}| = 7.7$ m/s²
- c. $|a_{\text{up}}| = 1.1$ m/s²
- d. $|a_{\text{up}}| = 0.85$ m/s²
- e. $|a_{\text{up}}| = 4$ m/s²

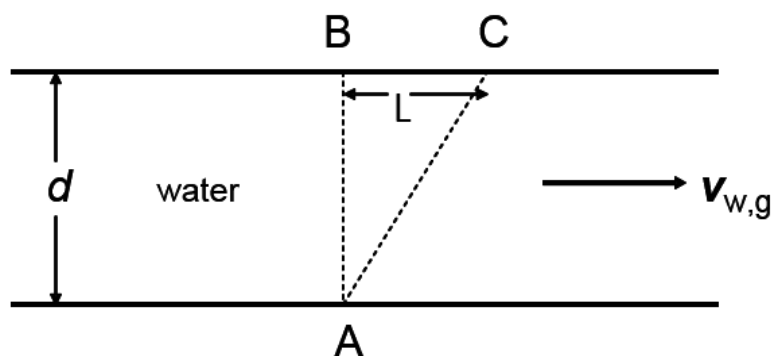
13) What is the direction of the box's acceleration as it moves up the ramp?

- a. $+x$
- b. $-x$
- c. 0

14) Eventually the box is observed to slide back down the ramp with constant acceleration a_{down} . Compare the magnitude of the acceleration of the box going up and down the ramp.

- a. $|a_{\text{down}}| < |a_{\text{up}}|$
- b. $|a_{\text{down}}| = |a_{\text{up}}|$
- c. $|a_{\text{down}}| > |a_{\text{up}}|$

The next two questions pertain to the situation described below.



The width of a river is $d = 90$ m, the water flows with a constant speed $v_{w,g}$ with respect to its banks. An athletic swimmer can swim at a speed $v_{s,w} = 6$ m/s in still water. Although she heads directly across the river toward the opposite bank with her maximum effort, she arrives at point C on the opposite bank a distance $L = 60$ m downstream.

15) The speed of the water, relative to the ground is:

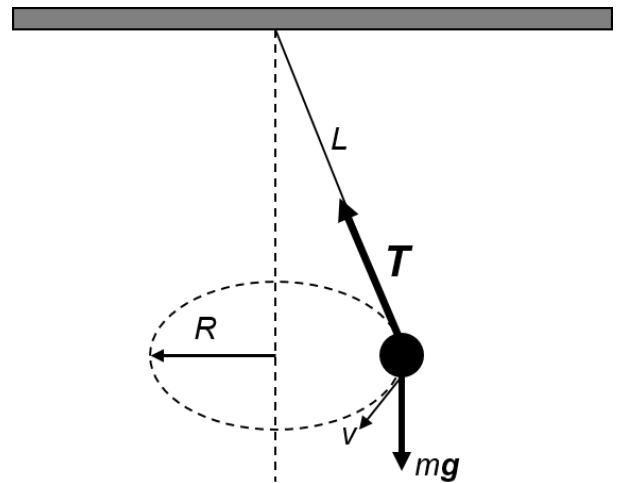
- a. $v_{w,g} = 7.2$ m/s
- b. $v_{w,g} = 3$ m/s
- c. $v_{w,g} = 6$ m/s
- d. $v_{w,g} = 4$ m/s
- e. $v_{w,g} = 10$ m/s

16) If instead she chose a heading that would get her directly across the river (point B), how long would it take her to get to the other side?

- a. $t = 45$ s
- b. $t = 20$ s
- c. $t = 15$ s

The next two questions pertain to the situation described below.

A ball of mass $m = 1.5$ kg is suspended from a rope of length L and travels in a horizontal circle of radius $R = 1.8$ m at a constant speed $v = 3$ m/s, as shown in the figure.



17) What is the horizontal component of the tension in the rope $T_{\text{horizontal}}$?

- a. $T_{\text{horizontal}} = 15$ N
- b. $T_{\text{horizontal}} = 7.5$ N
- c. $T_{\text{horizontal}} = 8.3$ N

18) What is the length L of the rope?

- a. $L = 2.02$ m
- b. $L = 3.96$ m
- c. $L = 2.42$ m

The next two questions pertain to the situation described below.

For the following problems assume the earth is a sphere with radius $R_E = 6.4 \times 10^6$ m, and mass $M_E = 6 \times 10^{24}$ kg.

19) If a person weighs 120 pounds on the surface of the Earth, how much would the person weigh on the surface of a planet that has $1/2$ of the mass of the earth and $1/2$ of the Earth's radius?

- a. 120 pounds
- b. 60 pounds
- c. 240 pounds

20) What is the speed of a 128 kg satellite in a circular orbit around the earth at a distance of $R_{\text{orbit}} = 1.92 \times 10^7$ m from the center of the earth?

- a. 0.00808 m/s
- b. 4570 m/s
- c. 1250 m/s
- d. 7910 m/s
- e. 1.12×10^5 m/s