

Statics - TAM 210 & TAM 211

Lecture 24

March 14, 2018

Chap 7.3

Announcements

□ Upcoming deadlines:

- Quiz 5 (3/14-16)
 - Sign up at CBTF
 - Up thru and including Lecture 22 (Shear Force & Bending Moment Diagrams), although review from Lectures 23-24 will be helpful.
- Monday (3/26)
 - Mastering Engineering Tutorial 11
- Thursday (3/29)
 - WA 4 due
- Tuesday (3/13)
 - PL HW 8
- Friday (3/30)
 - Last lecture for TAM 210 students
- Written exam (Thursday 4/5, 7-9pm in 1 Noyes Lab)
 - Conflict exam (Monday 4/2, 7-9pm)
 - **Must make arrangements with Prof. H-W by Friday 3/16**
 - DRES accommodation exam. Make arrangements at DRES. Must tell Prof. H-W

How to orient positive V and M on a FBD?

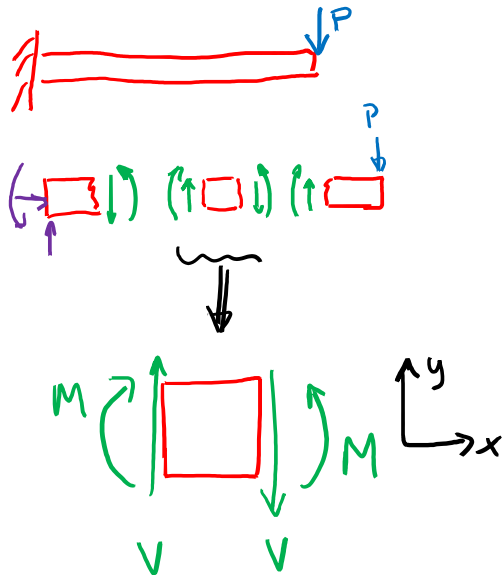
“Positive” sign convention:

“Positive shear will create a clockwise rotation”

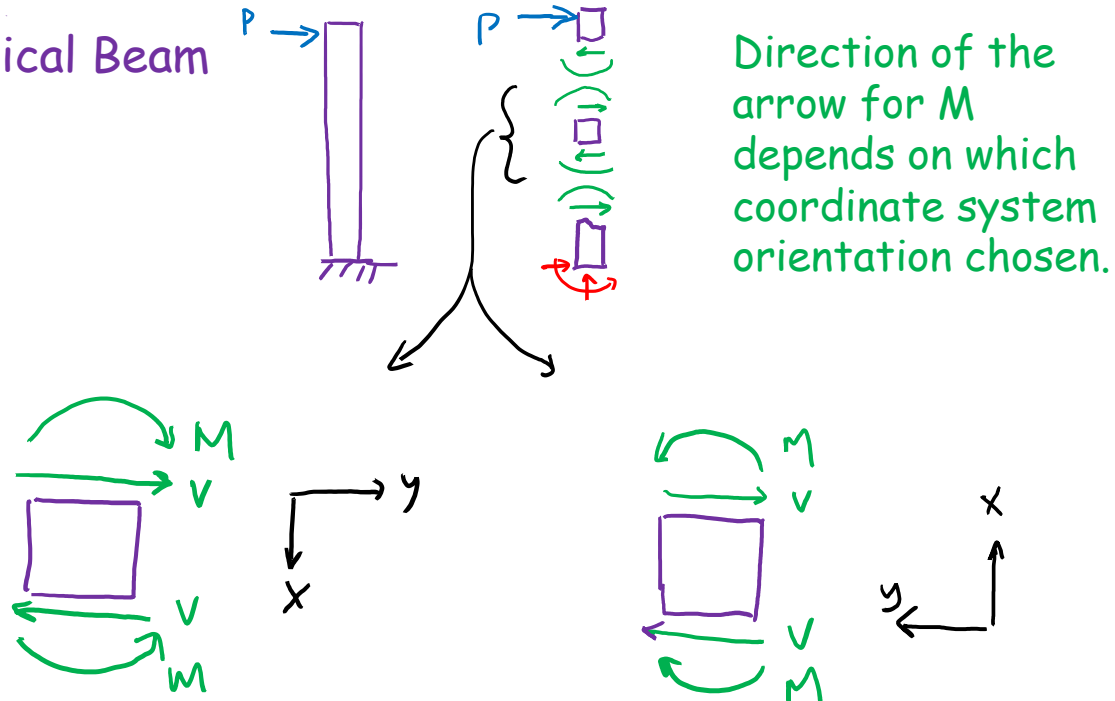
⇒ Draw V arrows to create CW rotation

Therefore the direction of the arrow for the bending moment M on the same side of the segment follows the same sense as the shear force V pointing in the direction of the positive coordinate axis (the y-axes in these diagrams); thus both V and M create a clockwise rotation.

Horizontal Beam

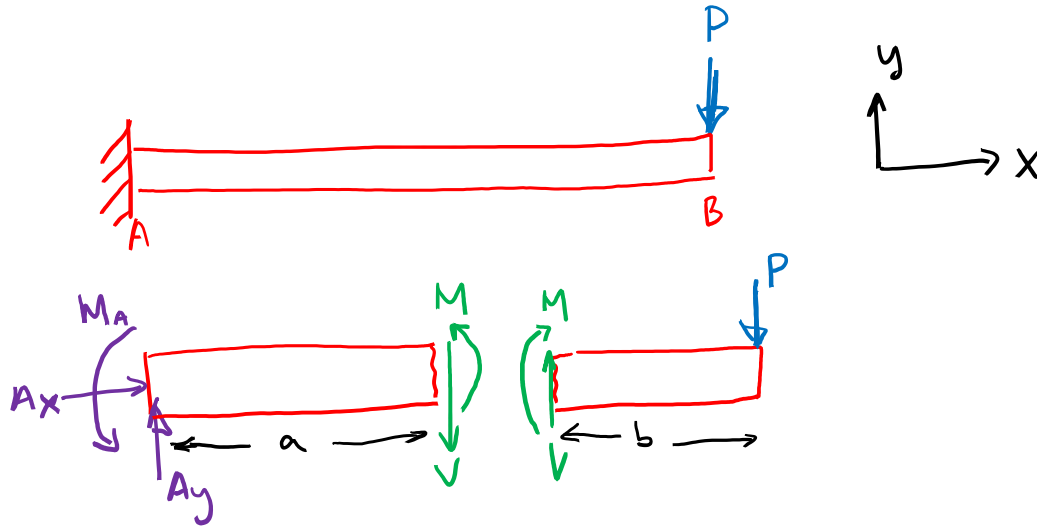


Vertical Beam



What sign to give V and M terms in equations of equilibrium?

Follow the positive orientations of the coordinate system.



For left side:

$$+\uparrow \Sigma F_y: A_y - V = 0$$

$$+\curvearrowright \Sigma M_A:$$

$$M_A + M - a \cdot V = 0$$

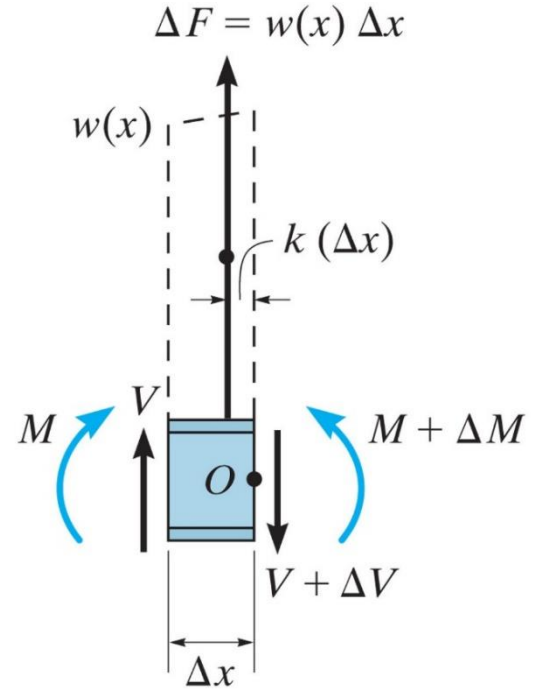
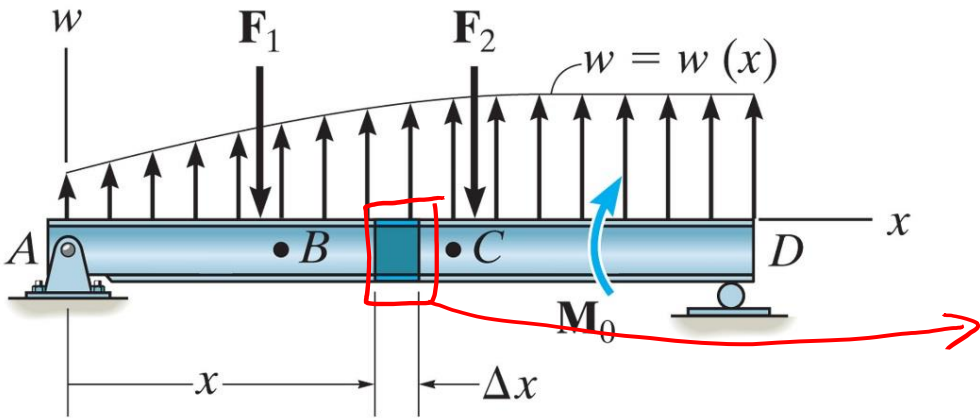
For right side:

$$+\uparrow \Sigma F_y: V - P = 0$$

$$+\curvearrowright \Sigma M_B:$$

$$-M - b \cdot V = 0$$

Recap: Relations Among Distributed Load, Shear Force and Bending Moments



Relationship between distributed load and shear:

$$\frac{dV}{dx} = w$$

Slope of shear force = distributed load intensity

$$\Delta V = V_2 - V_1 = \int w dx$$

Change in shear force = area under loading curve

Relationship between shear and bending moment:

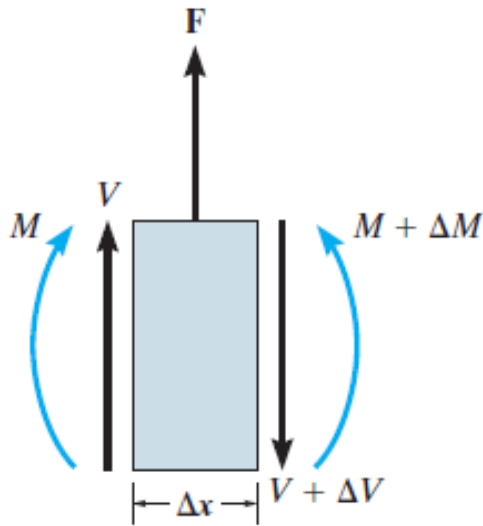
$$\frac{dM}{dx} = V$$

Slope of bending moment = shear force

$$\Delta M = M_2 - M_1 = \int V dx$$

Change in moment = area under shear curve

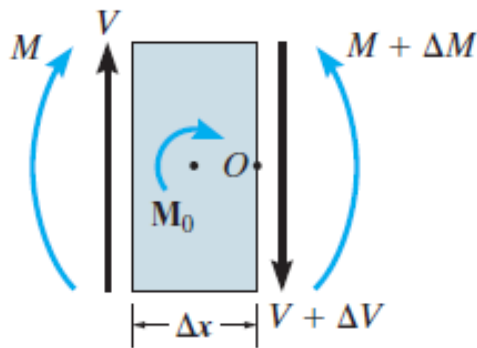
Recap: Wherever there is an external concentrated force or a concentrated moment, there will be a change (jump) in shear or moment, respectively.



$$\Sigma F_y:$$

$$V + F - (V + \Delta V) = 0$$

$$\Delta V = F \quad \text{Jump in shear force due to concentrated load } F$$



$$+ \curvearrowright \Sigma M_O:$$

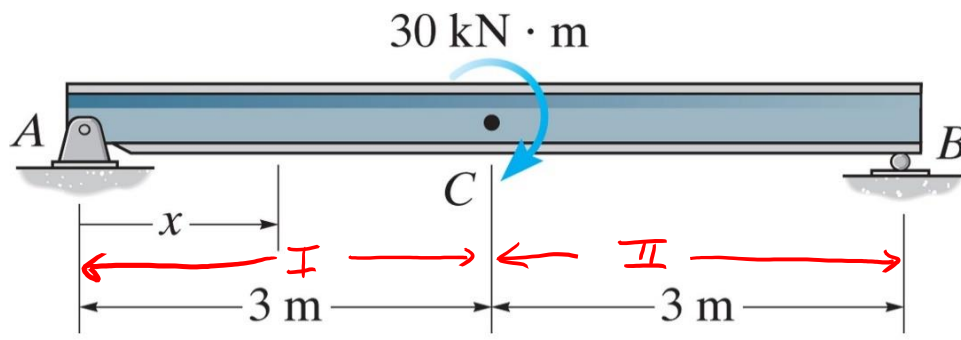
$$(M + \Delta M) - M - M_0 - V(\Delta x) = 0$$

$$\Delta M = M_0 + V(\Delta x)$$

$$\Delta M = M_0, \text{ when } \Delta x \rightarrow 0$$

Jump in bending moment due to concentrated couple moment M_0

* Note: the text, these notes, and convention assume that an applied concentrated moment M_0 in clockwise direction results in a positive change in $M(x)$



Draw the shear force and moment diagrams for the beam.

(i) Reaction supports:

$$\sum F_y: A_y = -B_y$$

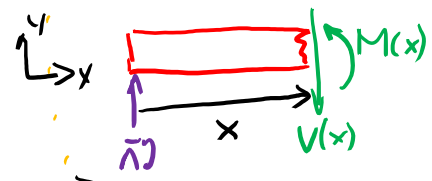
$$+\uparrow \sum M_A: -30 \text{ kN}\cdot\text{m} + (6\text{m})B_y = 0$$

$$B_y = 5 \text{ kN}$$

$$A_y = -5 \text{ kN}$$

Region I: $0 < x < 3$

A) using FBD & EoE to create $V(x)$ & $M(x)$:



$$\sum F_y: V(x) = A_y = -5 \text{ kN}$$

Constant, negative

$$+\uparrow \sum M_A: M(x) - x \cdot V(x) = 0$$

$$M(x) = x \cdot V(x)$$

Linear w/ slope $V(x)$

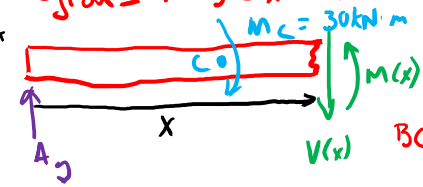
$$\text{slope } \frac{dM}{dx} = V(x) = -5 \text{ kN}$$

use BC's to find end points for $M(x)$

$$x=0: M(0) = 0$$

$$x=3\text{m}: M(3\text{m}^-) = -15 \text{ kN}\cdot\text{m}$$

Region II: $3 < x < 6$



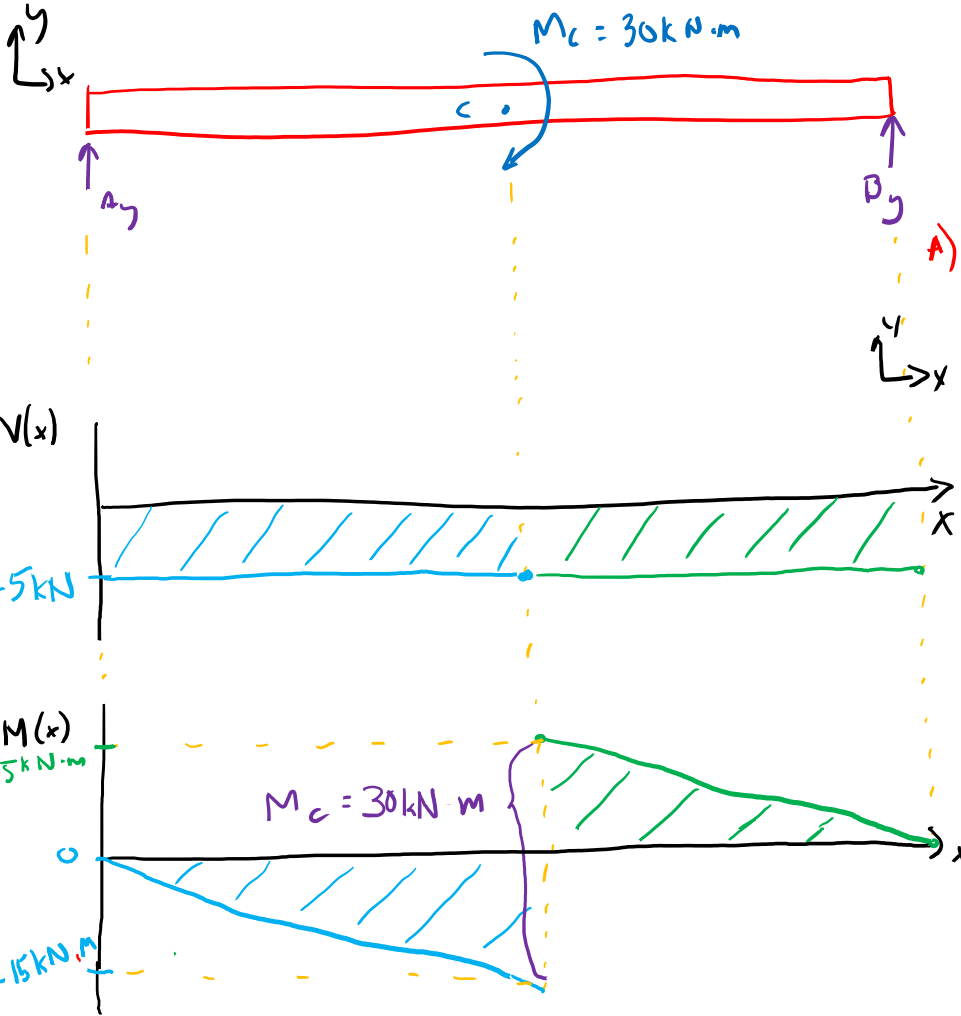
$$\sum F_y: V(x) = A_y = -5 \text{ kN}$$

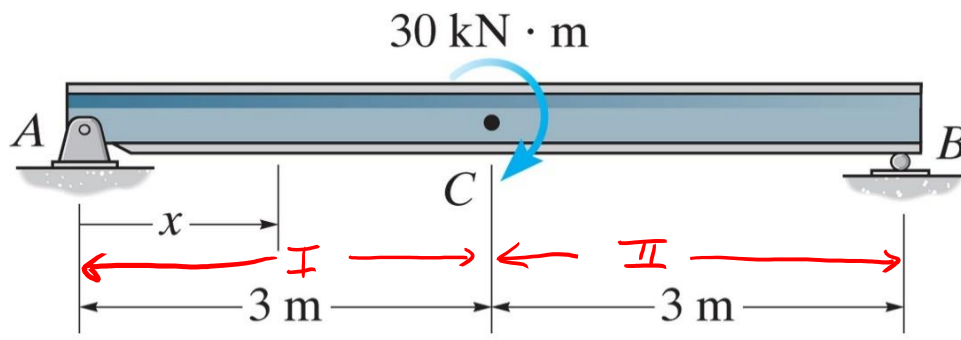
$$+\uparrow \sum M_A: M(x) - x \cdot V(x) - M_c = 0$$

$$M(x) = x \cdot V(x) + M_c$$

$$\text{BC's: } M(3\text{m}^+) = -15 + 30 = 15 \text{ kN}\cdot\text{m}$$

$$M(6\text{m}) = -30 + 30 = 0$$





Draw the shear force and moment diagrams for the beam.

B) Alternative method to quickly draw V & M diagrams

use $\frac{dV}{dx} = w(x)$ to define slope of $V(x)$

$\Delta V = V_2 - V_1 = \int w(x) dx$ change in shear = area under loading curve

$\frac{dM}{dx} = V(x)$ to define slope of $M(x)$

$\Delta M = M_2 - M_1 = \int V(x) dx$ change in moment = area under shear curve

For concentrated moment :

$w(x) = 0$

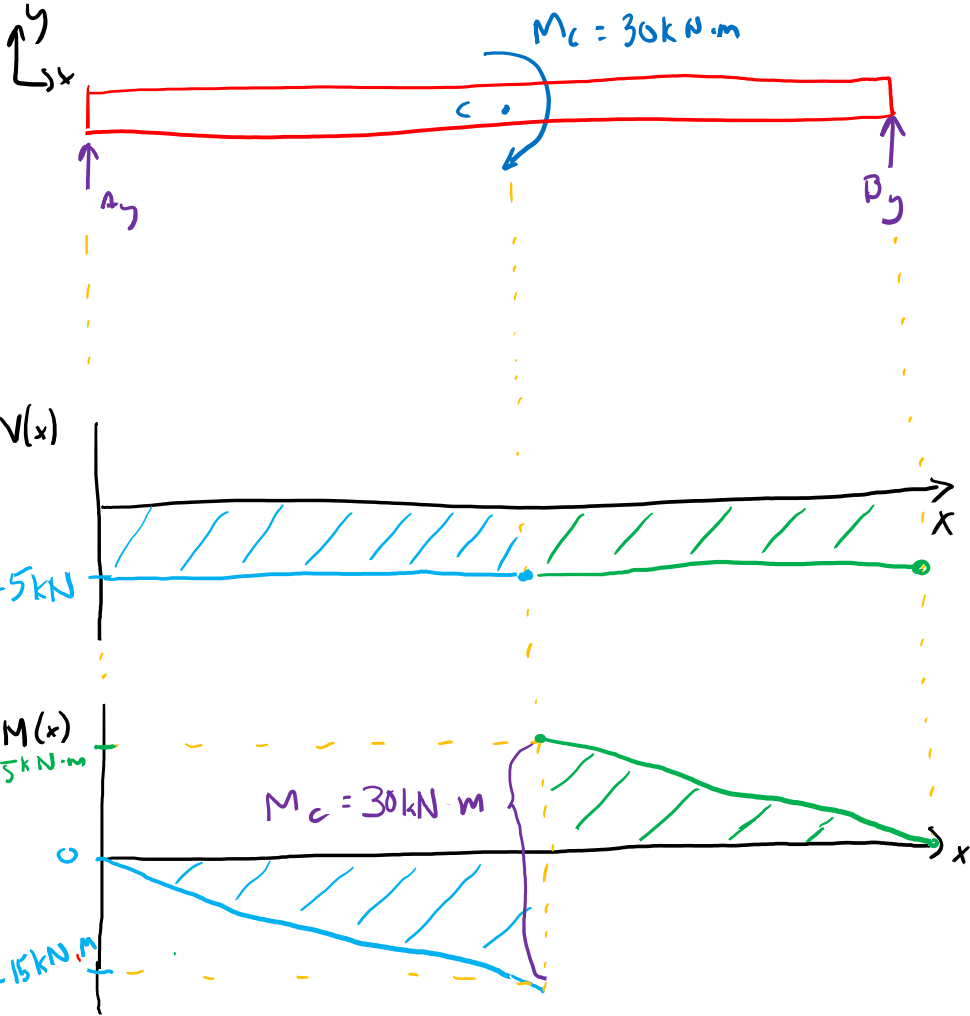
$\rightarrow \frac{dV}{dx} = 0$ (no slope)

$\Delta V = \int w dx = 0$ (no change in V)

$\frac{dM}{dx} = V(x) = \text{neg. const} = A_y = -5 \text{ kN}$

$\Delta M = M_c$ (from knowledge of applied moment M_c)

Since $M_c \curvearrowright$, then ΔM is in positive direction \uparrow (see notes 2 slides prior)



Draw the shear force and moment diagrams for the beam.

[solution written out side of class]

1) Find support reactions

$$\uparrow \sum F_y: A_y + B_y - 6\text{ kN} - 12\text{ kN} = 0$$

$$\uparrow \sum M_A: (2\text{ m})6\text{ kN} - (4\text{ m})12\text{ kN} + (6\text{ m})B_y = 0$$

$$B_y = 10\text{ kN} \Rightarrow A_y = 8\text{ kN}$$

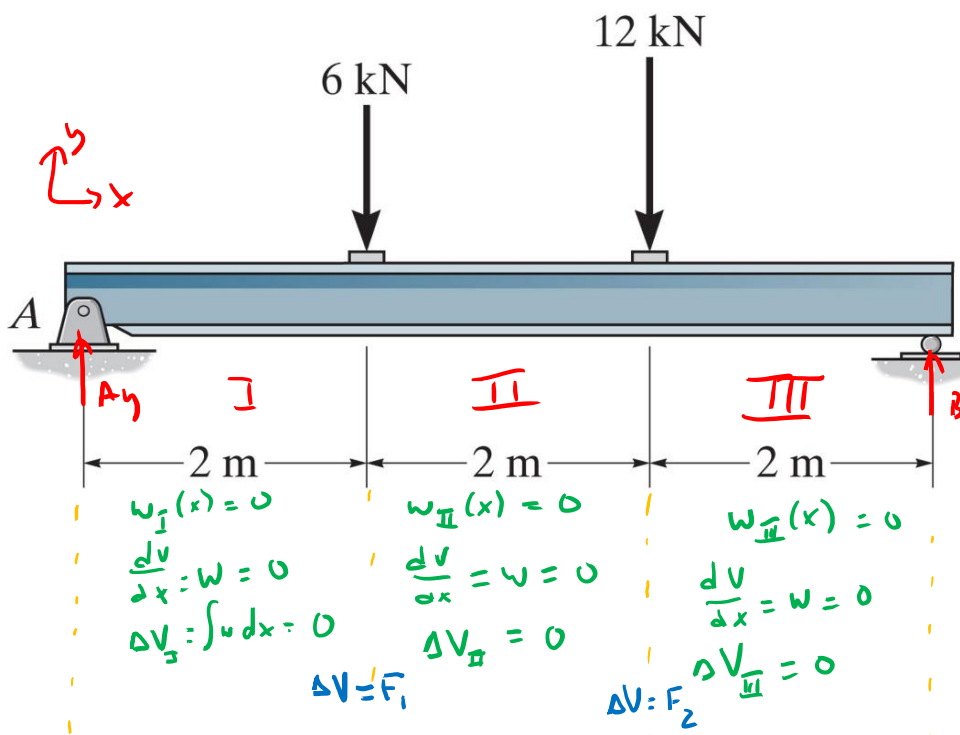
2) Quickly draw $V(x)$ & $M(x)$

within a region use:

$$\frac{dV}{dx} = w, \quad \Delta V = V_2 - V_1 = \int w dx$$

$$\frac{dM}{dx} = V, \quad \Delta M = M_2 - M_1 = \int V dx$$

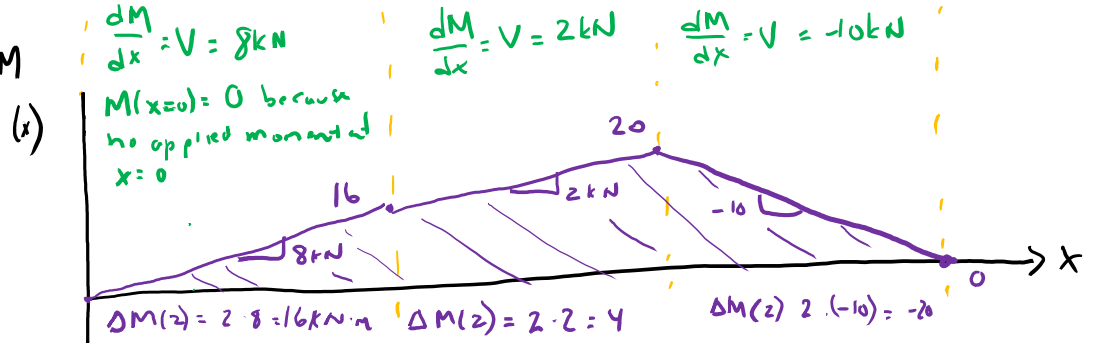
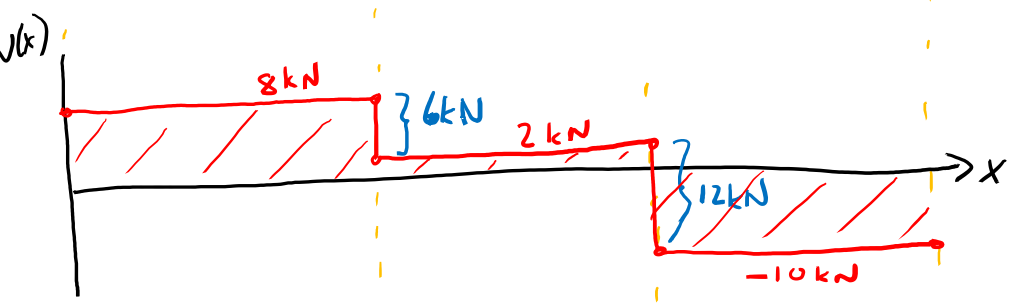
At locations of applied loads, use $\Delta V = F$

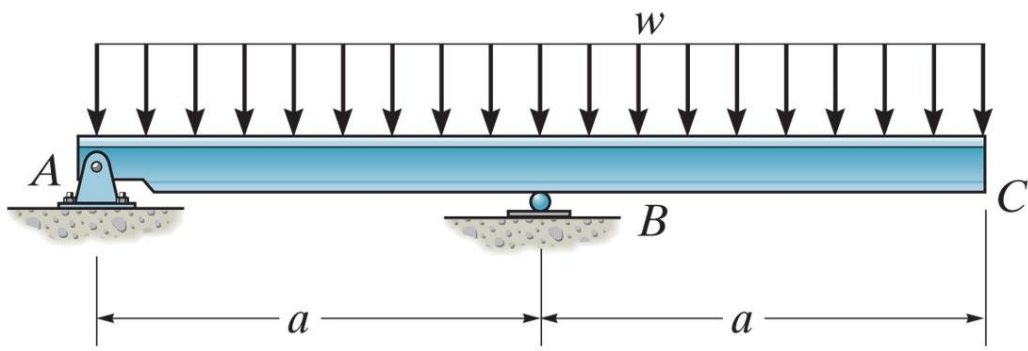


$w_I(x) = 0$
 $\frac{dV}{dx} = w = 0$
 $\Delta V_I = \int w dx = 0$
 $\Delta V = F_1$

$w_{II}(x) = 0$
 $\frac{dV}{dx} = w = 0$
 $\Delta V_{II} = 0$
 $\Delta V = F_2$

$w_{III}(x) = 0$
 $\frac{dV}{dx} = w = 0$
 $\Delta V_{III} = 0$





Draw the shear force and moment diagrams for the beam.