

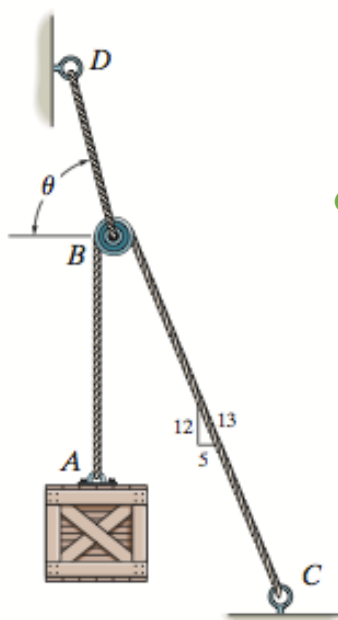
TAM 210/211 Written Assignment 3 (due Thursday, Mar 1st)

The **OBJECTIVE** of this written assignment is to practice **drawing free-body diagram (FBD)** and **writing equations of equilibrium (EoE)**.

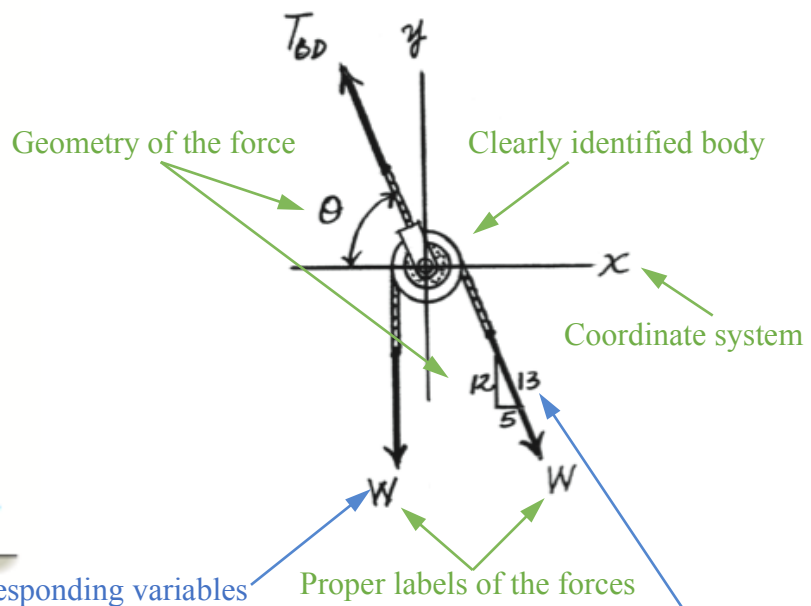
DIRECTION: On each problem solution page, use the top half to clearly draw out a large FBD of the specified body/bodies, and the bottom half to write the corresponding equations of equilibrium for the diagram. **DO NOT SOLVE THE PROBLEM.**

General “Written Assignment Instructions” applies. Additional grading criteria includes: 1) proper use of page space for FBD and EoE; 2) properly labeled external forces on the body; 3) properly labeled geometry of the forces; 4) coordinate system; 5) variables and geometry in EoE correspond to FBD.

Sample Problem: The cord BD can support a maximum load of T . Perform equilibrium analysis on pulley B for determining the maximum weight of the crate, and the angle θ for equilibrium. Assume the mass of the pulley is negligible.



Sample FBD Solution

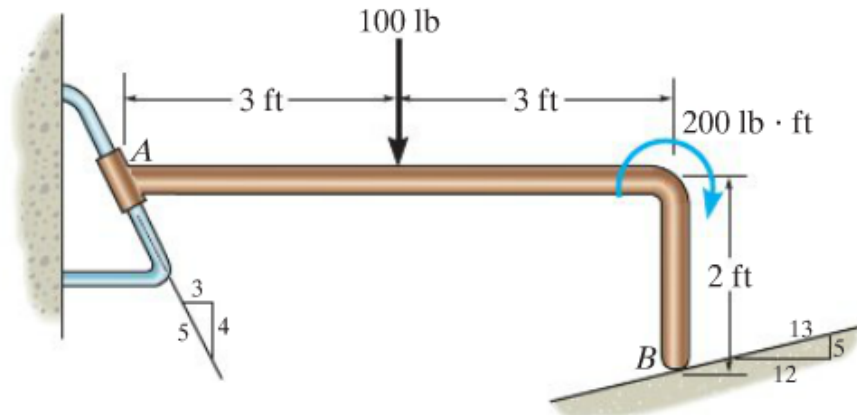


Sample EoE Solution

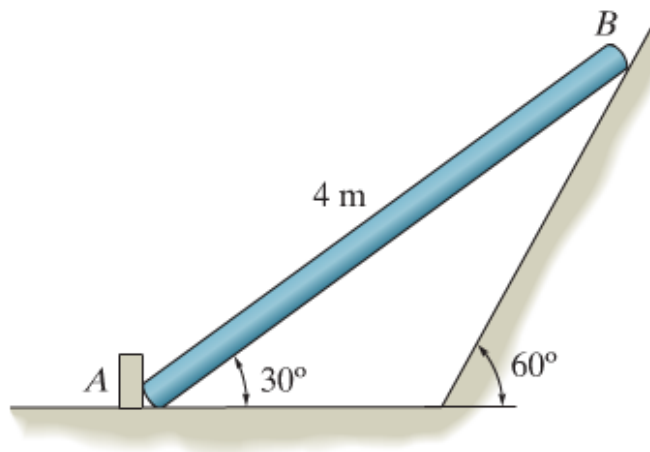
$$\sum F_x = 0 = -T_{BDx} + W_x = -T_{BD}(\cos \theta) + W \left(\frac{5}{13} \right) = 0$$

$$\sum F_y = 0 = T_{BDy} - W - W_y = T_{BD}(\sin \theta) - W - W \left(\frac{12}{13} \right) = 0$$

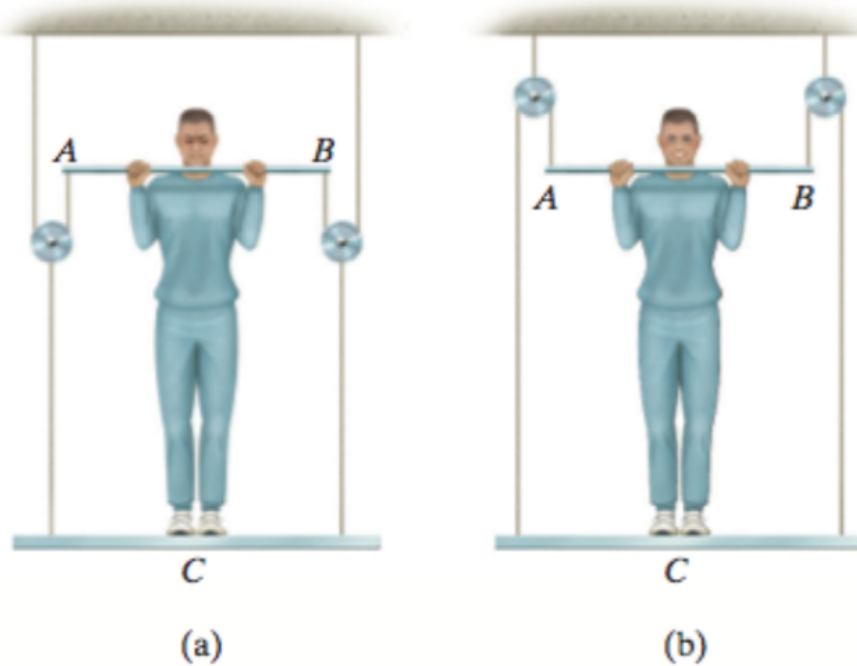
Problems 1: Draw the free body diagram and write the equations of equilibrium for the copper bent rod. It is supported by a smooth surface at B and by a collar at A , which is fixed to the rod and is free to slide over the fixed inclined rod.



Problem 2: Draw the free body diagram and write the equations of equilibrium for the smooth uniform bar that weighs W .



Problem 3: A man having a weight of W attempts to hold himself using one of the two methods shown. Draw the free-body diagram of the man and write the equations of equilibrium in both configurations.



Problem 4: Draw the free body diagram of the members AD , BF and CE and write the equations of equilibrium. Identify any two or three force member(s) and be sure to draw the corresponding FBD accordingly.

